


CANADIAN PONY CLUB



D2 LEVEL WRITTEN/ORAL Fall 2010

References: MH Manual of Horsemanship – 12th Edition (2003)
US D USPC Manual of Horsemanship D Level
US C USPC Manual of Horsemanship C Level

Total Marks 70 Pass 45.5 (65%)

PART A: STALL AND PASTURE

10 Marks

- [3] 1. Give 3 disadvantages of keeping a pony at grass.
MH 139 US D 160
- [1] 2. Should stall doors open inwards or outwards?
MH 129
- [3] 3. List 3 features you would look for in a well built stable.
MH 128-134 US C 156 – 157
- [3] 4. List 3 items you would check for safety in a new paddock before turning your pony out.
US C 164

PART B: FEEDING

10 Marks

- [3] 1. Name three things that help you decide how much a horse should be fed.
MH 171 US D 192
- [2] 2. Name 2 succulent foods suitable for horses.
MH 166-167
- [3] 3. List three rules of good feeding.
MH 158 US D 192-193

- [2] 4. Describe two methods of watering a horse in a stall.
MH 154 US D 188

PART C: FOOT AND SHOEING

10 Marks

- [3] 1. List three signs that a horse needs reshoeing.
US D 206-207
- [4] 2. Name 4 parts of the foot.
MH 222 US D 201
- [3] 3. List 3 things to check for in a newly shod foot.
MH 226

PART D: GROOMING

10 Marks

- [6] 1. Name three grooming tools and give one purpose for each one.
MH 200-202 US D 169-170
- [3] 2. List 3 reasons to groom a pony.
US D 168
- [1] 3. When is the best time to do a complete and thorough grooming? Why?
MH 200 US D 168

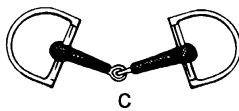
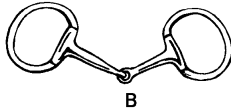
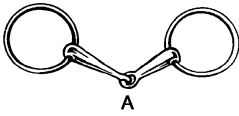
PART E: VET AND FIRST AID

12 Marks

- [4] 1. List 4 signs of good health.
MH 231-232 US D 210
- [2] 2. List two things to feel for on the leg that will tell you where the horse is injured.
US D 214
- [2] 3. What are 2 things you should do regularly to ensure your pony remains healthy?
US D 215 – 216
- [4] 4. List 4 signs of colic.
US D 211

PART F: SADDLERY**8 MARKS**

- [3] 1. Name the snaffle bits.
MH 304



- [4] 2. Name two of each:
 a) two types of leather girths. MH 286-288 US D 267
 b) two types of nosebands MH 310-312 US D 275
- [1] 3. What is the name given to a saddlepad cut in the shape of the saddle?
MH 291 US D 272

PART G: MISCELLANEOUS**10 MARKS**

- [4] 1. List four of the five colour points used when describing a horse's colour.
MH 393 US D 232
- [3] 2. List 3 points to keep in mind when measuring the height of your horse.
MH 400-401 US D 234-235
- [3] 3. Give the correct term for
 a) a new born horse. MH 402 US D 235
 b) a black spot on a white marking MH 396 US D 234
 c) an eye which shows white or blue-white colouring MH 396